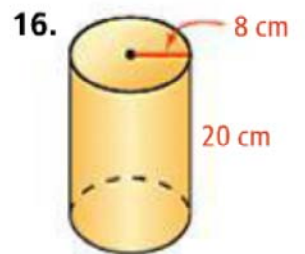
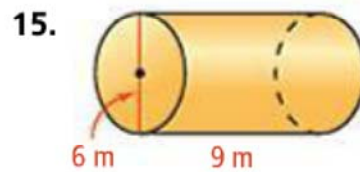
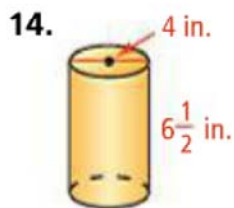
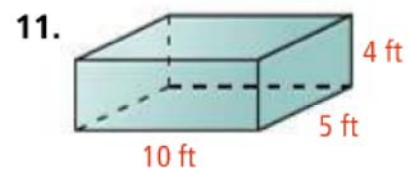
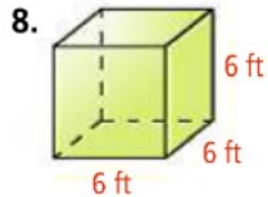
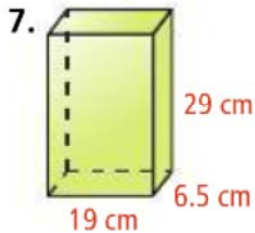


Homework: p. 704: 7,8,11,14-16

**MODIFIED DIRECTIONS:**

Find the Surface Area and Volume to the nearest tenth.



Time for Chapter 9 Quiz and  
Algebra Review Skill Test #6!